



Reading Time to the Hour

Name: _____ Date: _____


Part 1: Write the time shown on each clock.



_____ o'clock




_____ o'clock




_____ o'clock

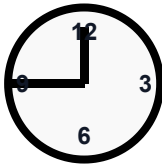
Part 2: Draw lines to match the analog clocks to the digital times.



9:00



2:00



6:00