




Telling Time to the Hour and Half Hour


Name: _____

Date: _____

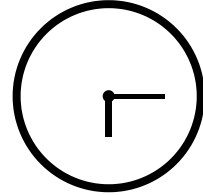
Part 1: What time is it? Write the time below each clock.



_____ o'clock




_____ :




_____ :

Part 2: Draw the clock hands to show these times.


2 o'clock



7:30



11 o'clock



Part 3: Match the clock to the correct time. Draw a line.



6:30



9 o'clock