


Name: _____

Date: _____

Picture Addition Within 20

Count the objects in each group. Write an addition equation to find the total.

1. 


$$\begin{array}{r} \square + \square = \square \\ \hline \hline \end{array}$$

Total = _____

2. 


$$\begin{array}{r} \square + \square = \square \\ \hline \hline \end{array}$$

Total = _____

3. 

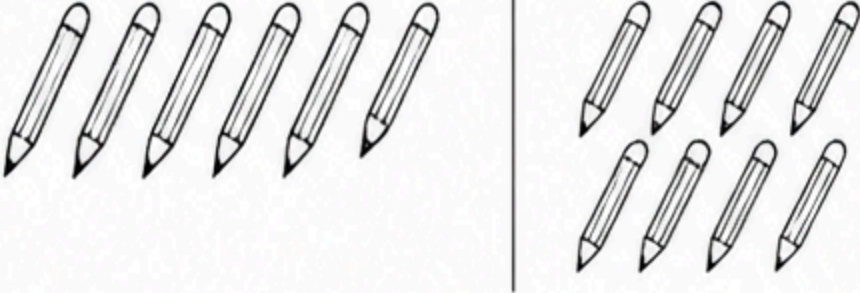
$$\begin{array}{r} \square + \square = \square \\ \hline \hline \end{array}$$

Total = _____

4. 


$$\begin{array}{r} \square + \square = \square \\ \hline \hline \end{array}$$

Total = _____

5. 

$$\begin{array}{r} \square + \square = \square \\ \hline \hline \end{array}$$

Total = _____

6. 

$$\begin{array}{r} \square + \square = \square \\ \hline \hline \end{array}$$

Total = _____