


# Shading Fractions of Shapes

Name: \_\_\_\_\_


Date: \_\_\_\_\_

Instructions: Shade the correct number of parts to show each fraction.

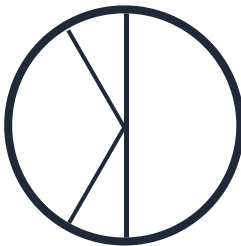
1. Shade  $\frac{1}{2}$




2. Shade  $\frac{1}{4}$



3. Shade  $\frac{1}{3}$



4. Shade  $\frac{3}{4}$



5. Shade  $\frac{2}{4}$



6. Shade  $\frac{2}{3}$



★ Great work! Check your shading carefully.