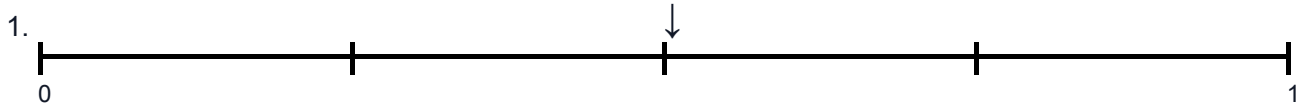


Identifying Fractions on Number Lines

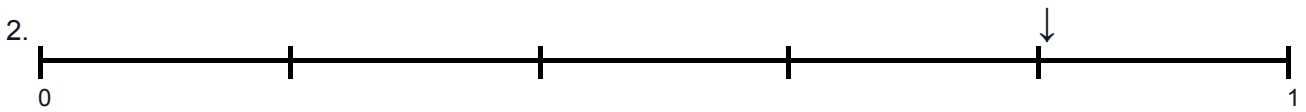
Name: _____

Date: _____

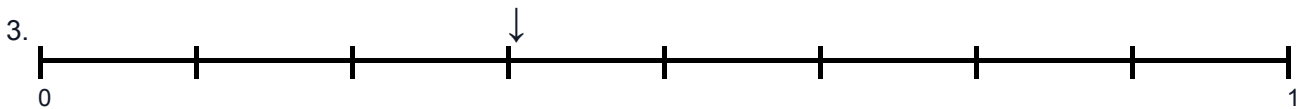
Part A: Write the fraction shown by each arrow.



Answer: _____



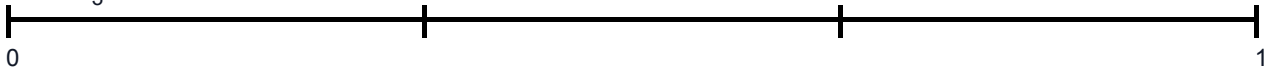
Answer: _____




Answer: _____

Part B: Mark the following fractions on the number lines with an arrow (↓).

4. Mark $\frac{2}{3}$ on the number line.



5. Mark $\frac{3}{5}$ on the number line.



6. Mark $\frac{5}{6}$ on the number line.

