

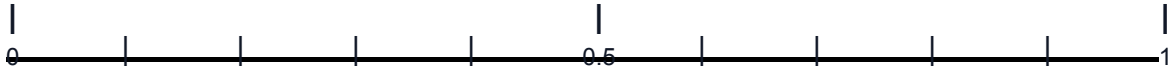
Decimals on a Number Line

Name: _____


Date: _____

Part A: Mark the decimals on the number lines

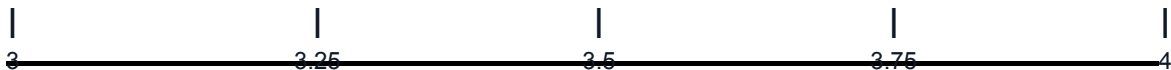
1. Mark 0.4, 0.7, and 0.9 on the number line:



2. Mark 1.3, 1.8, and 2.5 on the number line:



3. Mark 3.25, 3.75, and 4.15 on the number line:

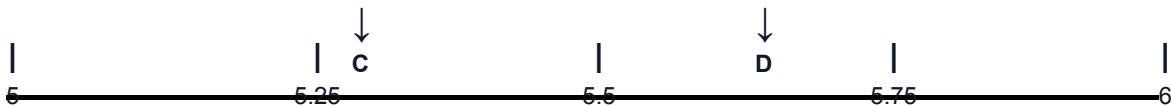


Part B: Write the decimal shown by each arrow

4. Arrow A: _____ Arrow B: _____



5. Arrow C: _____ Arrow D: _____



Part C: Challenge

6. Write three decimals between 7.3 and 7.4:

_____, _____, _____