

# Number Line Doubles and Halves


Name: \_\_\_\_\_

Date: \_\_\_\_\_

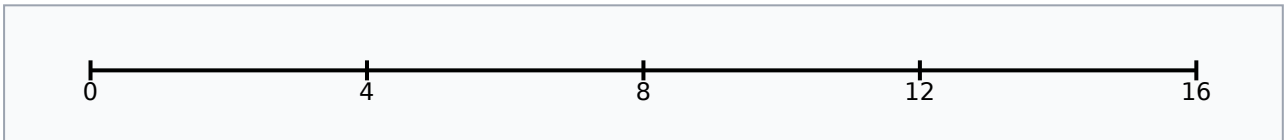
Use the number lines to show your jumps. Write your answers in the boxes.

## Part A: Doubles


1. Double 4 = \_\_\_\_\_



2. Double 6 = \_\_\_\_\_

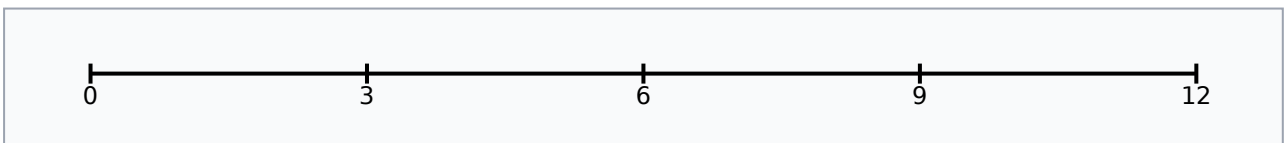


3. Double 3 = \_\_\_\_\_

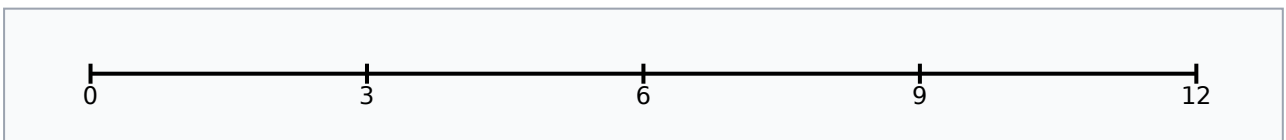


## Part B: Halves

4. Half of 10 = \_\_\_\_\_



5. Half of 8 = \_\_\_\_\_



6. Half of 14 = \_\_\_\_\_

