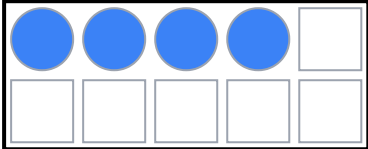


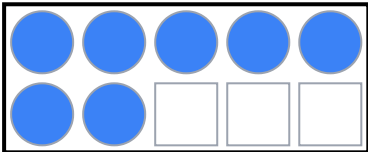
Ten Frame Number Bonds to 10

Name: _____

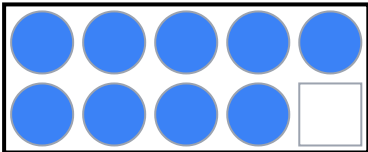
Date: _____

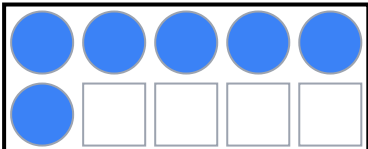
Instructions: Look at each ten frame. Count the filled circles and write the number bond.

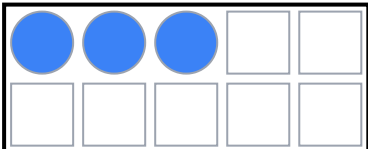
1.  _____ + _____ = 10

2.  _____ + _____ = 10


3.  _____ + _____ = 10

4.  _____ + _____ = 10

5.  _____ + _____ = 10

6.  _____ + _____ = 10

Challenge! ✨ Draw your own ten frames:

 _____ + _____ = 10