



Making Shapes from Other Shapes

Name: _____ Date: _____

1. Look at the shape made from smaller shapes. Count how many of each shape was used.




How many squares? _____



How many triangles? _____

2. Draw a picture using these shapes:

- 2 circles
- 3 rectangles



3. Circle the correct answer:

If I put 2 triangles together, I can make a:

square rectangle circle triangle

If I put 4 small squares together, I can make a:

bigger square triangle circle smaller square

4. How many triangles would you need to make a rectangle?

Answer: _____