


Properties of 2D Shapes

Name: _____

Date: _____

Instructions: Look at each shape carefully. Count the number of sides and corners, then write your answers in the spaces provided.




Triangle

Number of sides: _____
Number of corners: _____



Square

Number of sides: _____
Number of corners: _____




Rectangle

Number of sides: _____
Number of corners: _____




Pentagon

Number of sides: _____
Number of corners: _____



Hexagon

Number of sides: _____
Number of corners: _____



Circle

Number of sides: _____
Number of corners: _____

☀ Challenge:

Which shape has the most corners? _____

Which shape has no corners at all? _____