

Measuring Perimeter


Name: _____

Date: _____

Remember: Perimeter is the distance around the outside of a shape. Add all the side lengths together!

Part A: Find the perimeter of these rectangles

1. 8 cm




Perimeter = _____

2. 10 cm



Perimeter = _____

3. 15 cm



Perimeter = _____

4. 12 cm

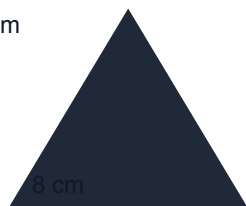


Perimeter = _____

Part B: Find the perimeter of these triangles

5.

7 cm



Perimeter = _____

6.

7 cm

9 cm

11 cm



Perimeter = _____

Part C: Word problems

7. A rectangular garden is 18 metres long and 12 metres wide. What is the perimeter of the garden?

Answer: _____

8. A square playground has sides that are each 25 metres long. What is the perimeter?

Answer: _____

9. A triangular flag has sides measuring 20 cm, 20 cm, and 15 cm. What is the perimeter of the flag?

Answer: _____