

Parallel and Perpendicular Lines


Name: _____

Date: _____

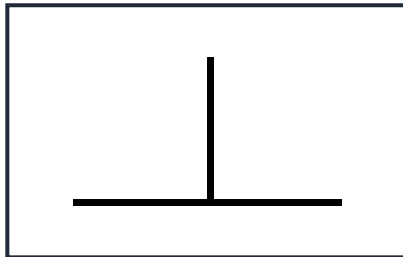
Remember:

- **Parallel lines** never meet. They stay the same distance apart.
- **Perpendicular lines** meet at a right angle (90°).

Part 1: Circle the correct answer




Parallel / Perpendicular



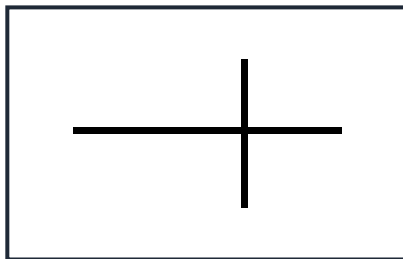
Parallel / Perpendicular



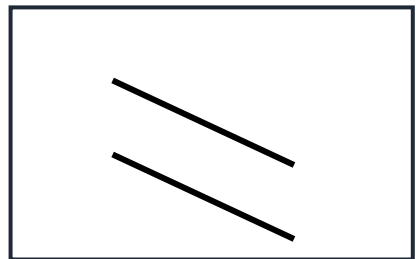
Parallel / Perpendicular



Parallel / Perpendicular



Parallel / Perpendicular



Parallel / Perpendicular


Part 2: Everyday Objects

Write **parallel** or **perpendicular** to describe the lines in these objects:

1. Railway tracks: _____
2. The corner where a wall meets the floor: _____
3. The edges of a ruler (long sides): _____
4. The letter T: _____
5. A ladder (the two long sides): _____
6. A plus sign (+): _____

Part 3: Draw Your Own

Draw two parallel lines:



Draw two perpendicular lines:

